


The United States Flag

Color the stripes that should be red.




Do some research in books or on the Internet to find the answers to the questions below, if you do not know the answers.

1. How many stars are on the U.S. flag? _____
2. What are the colors of the U.S. flag? _____
3. What do the stars represent? _____
4. How many stripes are on the flag? _____
5. What do the stripes represent? _____

Fifty States Research

Do some research in books or on the Internet. Write the answers on the lines.

1. What state is known as the Grand Canyon State? _____
2. What state is known is regarded as the gateway to the South? _____
3. What state is called the Bluegrass State? _____
4. What state is known as the Keystone State? _____
5. What is the largest state along the Pacific Ocean? _____
6. What is the smallest state along the Pacific Ocean? _____
7. What is the largest state along the Atlantic Ocean? _____
8. What is the smallest state along the Atlantic Ocean? _____
9. What is the smallest state in the United States? _____
10. What is the largest state in the United States? _____



Name fifteen states not mentioned in the questions above.

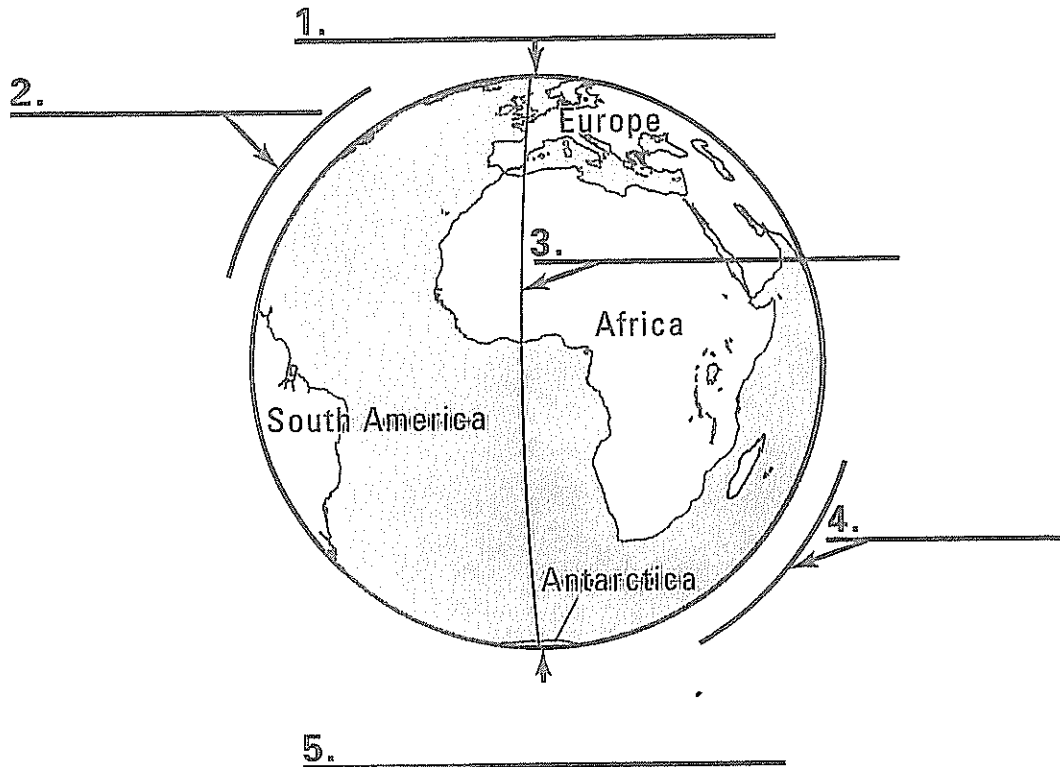
_____	_____	_____
_____	_____	_____
_____	_____	_____
_____	_____	_____
_____	_____	_____

Name _____

Practicing Skill 6

HOW TO Read a Globe

Use the words in the word bank to label the globe.



WORD BANK		
North Pole	Western Hemisphere	South Pole
Prime Meridian	Eastern Hemisphere	

Name _____

Use the state map of Missouri on page 7 to answer the following questions.

1. If you were in St. Louis, Missouri, and wanted to go to Kansas City, Missouri, in which direction would you travel? _____

2. What is the state capital of Missouri? _____
Circle the state capital on the map.
3. What river runs along the east side of the state of Missouri?

4. If you were visiting the boyhood home of Mark Twain and wanted to see the birthplace of the Pony Express, in which direction would you travel?

5. Trace the state boundaries of Missouri. If you traveled north on Highway 63 until you crossed the Missouri state boundary, what state would you enter? _____
6. How many miles away is Springfield from the St. Louis Gateway Arch? _____
7. Draw a line showing the roads you would take to travel from Springfield to Kirksville. List the roads you would take in the order you would take them. _____

