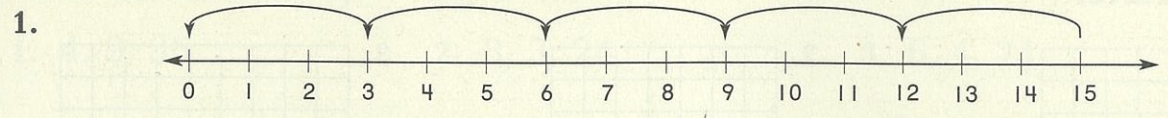
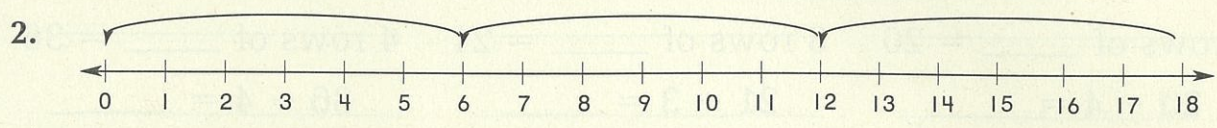


# Subtraction and Division

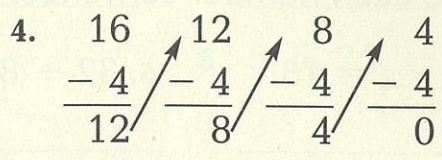
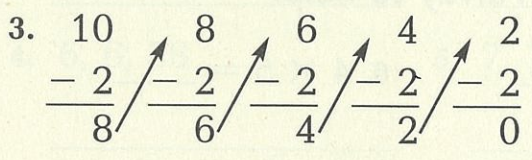
Write a division sentence for each.



\_\_\_\_\_



\_\_\_\_\_



\_\_\_\_\_

Use a number line or subtraction to solve.

5.  $12 \div 3 = \underline{\quad}$

6.  $20 \div 4 = \underline{\quad}$

7.  $30 \div 5 = \underline{\quad}$

8.  $6 \div 2 = \underline{\quad}$

\_\_\_\_\_

\_\_\_\_\_

## Mixed Review

9. 
$$\begin{array}{r} 271 \\ + 409 \\ \hline \end{array}$$

10. 
$$\begin{array}{r} 9,006 \\ - 7,847 \\ \hline \end{array}$$

11. 
$$\begin{array}{r} 7 \\ \times 6 \\ \hline \end{array}$$

12. 
$$\begin{array}{r} 4 \\ \times 9 \\ \hline \end{array}$$

13.  $7 \times 7 = \underline{\quad}$

14.  $8 \times 3 = \underline{\quad}$

15.  $8 \times 6 = \underline{\quad}$