

Flps

Name

Jaguars Science Final Exam

Date

Directions: fill in the blank with the correct answer choice from the word bank.

Sound	friction	Speed	Gravity
Heat	light	Light, heat, and sound	Mass

1. The three forms of energy are \_\_\_\_\_, \_\_\_\_\_, \_\_\_\_\_.
2. \_\_\_\_\_ energy makes steam, helps cook food, and can burn you.
3. \_\_\_\_\_ energy helps us see, is bright, and can burn you.
4. \_\_\_\_\_ energy can be heard, helps to keep you safe, and can be loud, soft, high, or low.
5. \_\_\_\_\_ is a force that slows or stops things that are touching.
6. If you drop a ball, it falls towards the earth because of \_\_\_\_\_.
7. The amount of matter an object has is its \_\_\_\_\_.
8. How fast something moves is its \_\_\_\_\_.

Directions: Read each question below carefully and write each answer in complete sentences.

9. What is matter?
10. What are the three forms of matter?
11. What happens to water at 100 on the Celsius scale?
12. What happens to water at 0 on the Celsius?

13. Explain how matter changes?

14. Name two kinds of magnets.

15. What forces helps to change an objects motion?

---

16. How do magnets have force and cause motion?

17. Name five things that are attracted to magnets.

18. What happens when two north poles try to touch?

19. Draw and label the life cycle of a frog.

20. What do all living things need in order to survive?

21. Name the three kinds of plants.

22. Draw and label parts of an orange blossom. Roots, petals, stem, fruit, seeds, leaf

23. Draw and label a picture of one thing that floats and one thing that sinks.

24. Name the animal body coverings.

25. Draw and label a wild and domestic animal.






26. What is the largest organ on the human body?

27. What is the heart?

28. What protects the brain?

29. What does the rib bones protect?






Directions: Draw a line with a blue crayon to match the tool name to the tool.

30.Measuring Cups	
31.Tape measure	
32.Magnifying glass	
33.Thermometer	
34.Balance	

## Push or pull

Grade 1 Science Worksheet

Circle the correct answer.

	push	pull
	push	pull
	push	pull
	push	pull
	push	pull

Is it easier to push or pull something with a rope?

---

### Move Heat Light Sound

Copy the right word under each picture. Some pictures might need 2 words.

